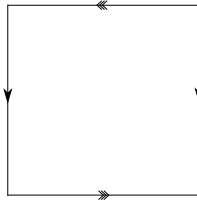


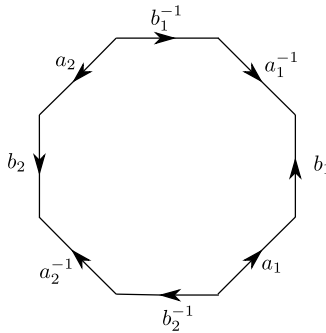
Problem set 5

1. Use the Mayer-Vietoris sequence to compute the homology of the space X obtained by identifying three n -discs along their boundaries.
2. Use the Mayer-Vietoris sequence to compute $H_*(\mathbb{R}P^2)$.
3. The Klein bottle K is the space obtained from the square I^2 by identifying opposite sides as indicated in the following picture:



Use Mayer-Vietoris to compute $H_*(K)$.

4. Consider a polygon with $4g$ edges which are grouped into g tuples, each consisting of 4 consecutive edges labelled in counterclockwise order by $a_k, b_k, a_k^{-1}, b_k^{-1}$ for $1 \leq k \leq g$ (the figure shows the case $g = 2$). By identifying the edges according to the labelling, one obtains a closed orientable surface Σ_g of genus g .

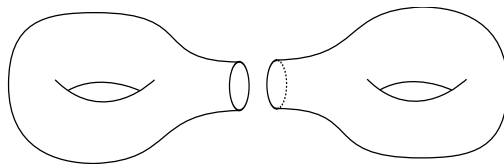


Compute $H_*(\Sigma_g)$ using this description and the Mayer-Vietoris sequence.

5. Given two manifolds M_0, M_1 of the same dimension, one can construct their *connected sum* $M_0 \# M_1$ by cutting out the interiors of two embedded

closed discs $D_0 \subset M_0, D_1 \subset M_1$, and identifying the boundaries ∂D_0 and ∂D_1 by some homeomorphism. (One doesn't need to precisely know what a manifold is in order to solve this exercise.)

An alternative inductive construction of the orientable genus g surfaces Σ_g is as follows: Σ_1 is the torus T^2 , and Σ_g is defined as $\Sigma_{g-1} \# \Sigma_1$ for $g \geq 2$. The figure shows how Σ_2 arises that way.



Compute $H_*(\Sigma_g)$ using this description and the Mayer-Vietoris sequence.

6. Construct a cycle that represents a generator of $\tilde{H}_n(S^n)$ for $n = 0, 1, 2$. (Start with $n = 0$, then pass to $n = 1$ using Mayer-Vietoris, and then to $n = 2$ using Mayer-Vietoris.)
7. Suppose that $X \vee Y$ be the wedge product obtained by identifying two points which are deformation retracts of neighbourhoods $U \subset X$ and $V \subset Y$. Show that $\tilde{H}_n(X \vee Y) \cong \tilde{H}_n(X) \oplus \tilde{H}_n(Y)$ for all n using Mayer-Vietoris.
8. Denote by SX the (unreduced) suspension of X , obtained from $I \times X$ by collapsing $\{0\} \times X$ and $\{1\} \times X$ each to a point. Use Mayer-Vietoris to show that $\tilde{H}_n(SX) \cong \tilde{H}_{n-1}(X)$.