

G - Algebraic Topology I

RUN TIME

00:06:26

NUMBER OF VOTES

0037



Start

Reset

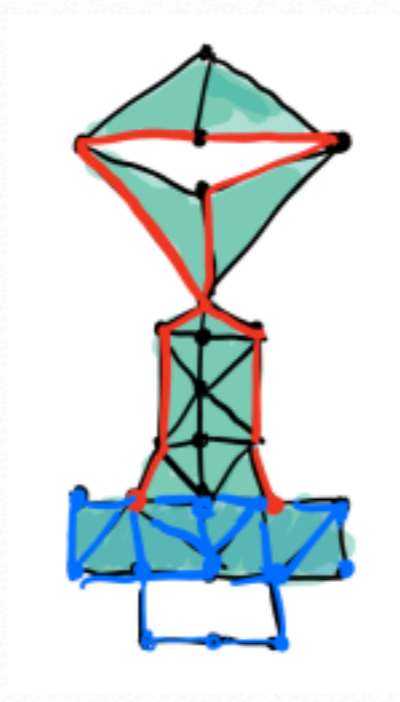
SHOW RESULTS

LIVE

[Full screen \(beta\)](#)

Select all chains drawn in red that represent relative 1-cycles in $S_1(X, A)$, where X is the delta complex depicted in the picture and A a subcomplex drawn in blue (several answers are possible).

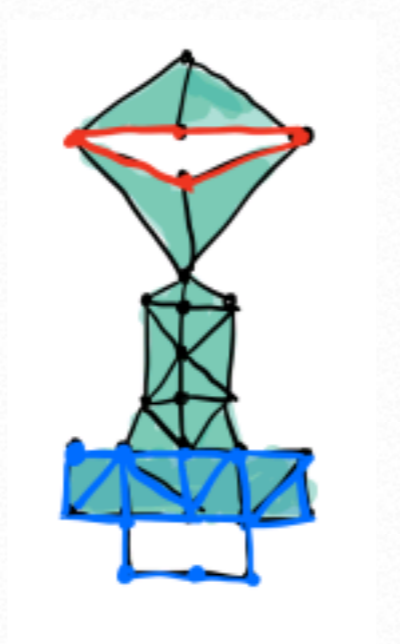
•



Run 1

78% | 29 Number of votes

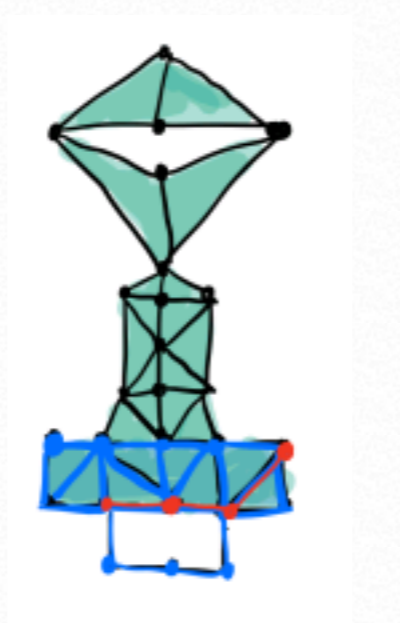
•



Run 1

49% | 18 Number of votes

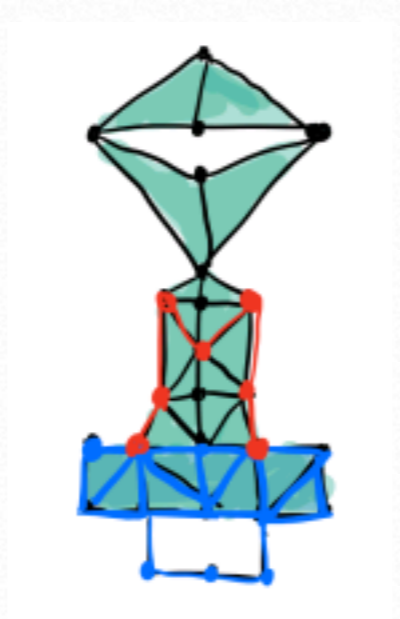
•



Run 1

73% | 27 Number of votes

•



Run 1

89% | 33 Number of votes